

FINAL NEET(UG)-2023 (EXAMINATION)

(Held On Sunday 7th MAY, 2023)

PHYSICS

TEST PAPER WITH ANSWER & SOLUTIONS

Physics : Section-A (Q. No. 001 to 035)

1. In a series LCR circuit, the inductance L is 10 mH, capacitance C is $1\mu\text{F}$ and resistance R is $100\ \Omega$. The frequency at which resonance occurs is :-
 (1) 15.9 kHz (2) 1.59 rad/s
 (3) 1.59 kHz (4) 15.9 rad/s

Ans. (3)

Sol. $L = 10 \times 10^{-3}\text{H}$

$C = 1 \times 10^{-6}\text{F}$

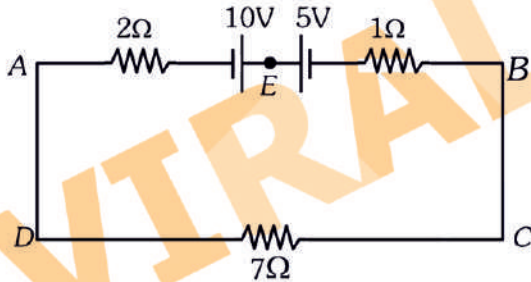
$R = 100\ \Omega$

At resonance $X_L = X_C$

$\omega L = \frac{1}{\omega C}$

$f = \frac{1}{2\pi\sqrt{LC}} = \frac{1}{2\pi\sqrt{10 \times 10^{-3} \times 10^{-6}}} = 1.59\text{ kHz}$

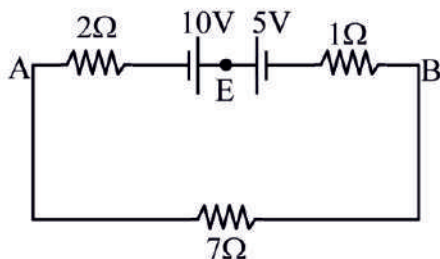
2. The magnitude and direction of the current in the following circuit is :-



- (1) 0.5 A from A to B through E
 (2) $\frac{5}{9}$ A from A to B through E
 (3) 1.5 A from B to A through E
 (4) 0.2 A from B to A through E

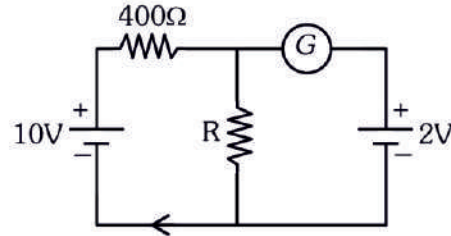
Ans. (1)

Sol. $i = \frac{10-5}{10} = \frac{5}{10}\text{A}$



= 0.5 A
 from A to B through E.

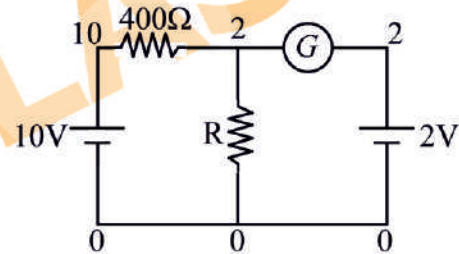
3. If the galvanometer G does not show any deflection in the circuit shown, the value of R is given by :



- (1) 50 Ω (2) 100 Ω
 (3) 400 Ω (4) 200 Ω

Ans. (2)

Sol. For no reading galvanometer. Potential across it is same.



$i_{400\Omega} \Rightarrow \frac{10-2}{400} = \frac{8}{400} = \frac{1}{50} = i_R$

$i_R \Rightarrow \frac{V_R}{R} \Rightarrow \frac{2}{R} = \frac{1}{50} \Rightarrow R = 100\Omega$

4. The temperature of a gas is -50°C . To what temperature the gas should be heated so that the rms speed is increased by 3 times ?
 (1) 3295°C (2) 3097 K
 (3) 223 K (4) 669°C

Ans. (1)

Sol. $v_{\text{rms}} \propto \sqrt{T}$

$\frac{v_1}{v_2} = \sqrt{\frac{T_1}{T_2}}$

= let initial speed is v

As speed is increased by 3 times so final speed become $4v$

$\Rightarrow \frac{v}{4v} = \sqrt{\frac{223}{T}}$

$T = 3568\text{ K}$

So temp. in $^\circ\text{C} = 3568 - 273 = 3295^\circ\text{C}$

5. The ratio of radius of gyration of a solid sphere of mass M and radius R about its own axis to the radius of gyration of the thin hollow sphere of same mass and radius about its axis is :-
 (1) $5 : 3$ (2) $2 : 5$ (3) $5 : 2$ (4) $3 : 5$

Ans. (4/BONUS)

Sol. Radius of gyration : $K = \sqrt{\frac{I}{m}}$

$$\frac{k_{\text{solid sphere}}}{k_{\text{hollow sphere}}} = \sqrt{\frac{2mR^2 / 5m}{2mR^2 / 3m}} = \sqrt{3} : \sqrt{5}$$

6. A Carnot engine has an efficiency of 50% when its source is at a temperature 327°C . The temperature of the sink is :-
 (1) 15°C (2) 100°C
 (3) 200°C (4) 27°C

Ans. (4)

Sol. Efficiency of Carnot engine

$$\% \eta = \left(1 - \frac{T_{\text{sink}}}{T_{\text{source}}} \right) \times 100$$

$$T_{\text{source}} = 327^\circ\text{C} = 600\text{K}$$

$$50 = \left(1 - \frac{T_{\text{sink}}}{600} \right) \times 100$$

$$\frac{1}{2} = 1 - \frac{T_{\text{sink}}}{600}$$

$$T_{\text{Sink}} = 300\text{K}$$

So temp. of sink is $^\circ\text{C} = 300 - 273 = 27^\circ\text{C}$

7. A bullet is fired from a gun at the speed of 280ms^{-1} in the direction 30° above the horizontal. The maximum height attained by the bullet is ($g = 9.8\text{ms}^{-2}$, $\sin 30^\circ = 0.5$) :-
 (1) 2000 m (2) 1000 m
 (3) 3000 m (4) 2800 m

Ans. (2)

$$\text{Sol. } H_{\text{max}} = \frac{u^2 \sin^2 \theta}{2g}$$

$$= \frac{(280)^2 (\sin 30^\circ)^2}{2(9.8)}$$

$$= 1000\text{m}$$

8. An electric dipole is placed at an angle of 30° with an electric field of intensity $2 \times 10^5\text{NC}^{-1}$. It experiences a torque equal to 4Nm . Calculate the magnitude of charge on the dipole, if the dipole length is 2cm .
 (1) 6 mC (2) 4 mC (3) 2 mC (4) 8 mC

Ans. (3)

Sol. τ on a dipole = $\vec{p} \times \vec{E}$

$$\tau = pE \sin \theta$$

$$4 = q \times \ell \times E \times \sin 30^\circ$$

$$4 = q \times 2 \times 10^{-2} \times 2 \times 10^5 \times \frac{1}{2}$$

$$q = 2 \times 10^{-3}$$

$$q = 2\text{mC}$$

9. Given below are two statements:

Statement I : Photovoltaic devices can convert optical radiation into electricity.

Statement II : Zener diode is designed to operate under reverse bias in breakdown region.

In the light of the above statements, choose the **most appropriate** answer from the options given below :

- (1) Both **Statement I** and **Statement II** are incorrect.
 (2) **Statement I** is correct but **Statement II** is incorrect.
 (3) **Statement I** is incorrect but **Statement II** is correct.
 (4) Both **Statement I** and **Statement II** are correct

Ans. (4)

Sol. Statement I : Photocell/solar cell convert light energy into electric energy/current.

Statement II : We use Zener diode in reverse biased condition, when reverse biased voltage more than breakdown voltage than it acts as stabilizer.

10. The errors in the measurement which arise due to unpredictable fluctuations in temperature and voltage supply are :
 (1) Personal errors
 (2) Least count errors
 (3) Random errors
 (4) Instrumental errors

Ans. (3)

Sol. Errors arise due to unpredictable fluctuations in temperature and voltage supply are \rightarrow random errors.

11. The ratio of frequencies of fundamental harmonic produced by an open pipe to that of closed pipe having the same length is :

- (1) $2 : 1$ (2) $1 : 3$ (3) $3 : 1$ (4) $1 : 2$

Ans. (1)

Sol. $\frac{n_{\text{cop}}}{n_{\text{cop}}} = \frac{2L}{4L}$

$$\Rightarrow \frac{n_{\text{oop}}}{n_{\text{cop}}} = \frac{2}{1}$$

12. The net magnetic flux through any closed surface is :

- (1) Positive
- (2) Infinity
- (3) Negative
- (4) Zero

Ans. (4)

Sol. Magnetic field exist in

Closed Loops (Monopoles do not exist)

$$\oint \vec{B} \cdot d\vec{A} = 0$$

(Gauss law for magnetism)

13. The work functions of Caesium (Cs), potassium (K) and Sodium (Na) are 2.14 eV, 2.30 eV and 2.75 eV respectively. If incident electromagnetic radiation has an incident energy of 2.20 eV, which of these photosensitive surfaces may emit photoelectrons ?

- (1) Both Na and K
- (2) K only
- (3) Na only
- (4) Cs only

Ans. (4)

Sol. Given energy of photon $E = 2.20 \text{ eV}$

Work function of Cs $\phi_0 = 2.14 \text{ eV}$, K $\phi_0 = 2.30 \text{ eV}$
, Na $\phi_0 = 2.75 \text{ eV}$

We know that e^- emits when $h\nu > \phi_0$

here it is clear that energy of photon is more than the work function of Cs [Caesium] only so
Ans. only (Cs).

14. The minimum wavelength of X-rays produced by an electron accelerated through a potential difference of V volts is proportional to :

- (1) $\frac{1}{V}$
- (2) $\frac{1}{\sqrt{V}}$
- (3) V^2
- (4) \sqrt{V}

Ans. (1)

Sol. Minimum wavelength of X-Rays is

$$\lambda_{\min} = \frac{hc}{eV}$$

$$\text{hence } \lambda_{\min} \propto \frac{1}{V}$$

$$\text{So Ans. } \left(\frac{1}{V}\right)$$

15. A 12 V, 60 W lamp is connected to the secondary of a step down transformer, whose primary is connected to ac mains of 220 V. Assuming the transformer to be ideal, what is the current in the primary winding ?

- (1) 2.7 A
- (2) 3.7 A
- (3) 0.37 A
- (4) 0.27 A

Ans. (4)

Sol. $V_s I_s = V_p I_p$ (ideal Transformer)

$$\Rightarrow P_{\text{out}} = P_{\text{in}}$$

$$\Rightarrow 60 = 220 \times I_p$$

$$I_p = \frac{60}{220} = 0.27 \text{ A}$$

16. Light travels a distance x in time t_1 in air and $10x$ in time t_2 in another denser medium. What is the critical angle for this medium ?

- (1) $\sin^{-1}\left(\frac{10t_2}{t_1}\right)$
- (2) $\sin^{-1}\left(\frac{t_1}{10t_2}\right)$
- (3) $\sin^{-1}\left(\frac{10t_1}{t_2}\right)$
- (4) $\sin^{-1}\left(\frac{t_2}{t_1}\right)$

Ans. (3)

Sol. Speed of light in air $V_1 = \frac{x}{t_1}$

speed of light in a medium $V_2 = \frac{10x}{t_2}$

$$\sin \theta_c = \frac{V_2}{V_1} = \frac{10x}{t_2} \cdot \frac{t_1}{x}$$

$$\theta_c = \sin^{-1}\left(\frac{10t_1}{t_2}\right)$$

17. A metal wire has mass $(0.4 \pm 0.002) \text{ g}$, radius $(0.3 \pm 0.001) \text{ mm}$ and length $(5 \pm 0.02) \text{ cm}$. The maximum possible percentage error in the measurement of density will nearly be :

- (1) 1.3%
- (2) 1.6%
- (3) 1.4%
- (4) 1.2%

Ans. (2)

Sol. $\rho = \frac{M}{V}$

$$\rho = \frac{M}{\pi r^2 \ell}$$

$$\frac{\Delta \rho}{\rho} = \frac{\Delta M}{M} + \frac{2\Delta r}{r} + \frac{\Delta \ell}{\ell}$$

$$\frac{\Delta \rho}{\rho} \% = \left[\frac{0.002}{0.4} + \frac{2(0.001)}{(0.3)} + \frac{0.02}{5} \right] \times 100\%$$

$$= \frac{1}{2}\% + \frac{2}{3}\% + \frac{2}{5}\%$$

$$= 1.6\%$$

18. For Young's double slit experiment, two statements are given below :

Statement I : If screen is moved away from the plane of slits, angular separation of the fringes remains constant.

Statement II : If the monochromatic source is replaced by another monochromatic source of larger wavelength, the angular separation of fringes decreases.

In the light of the above statements, choose the correct answer from the options given below :

- (1) Both **Statement I** and **Statement II** are false
- (2) **Statement I** is true but **Statement II** is false
- (3) **Statement I** is false but **Statement II** is true
- (4) Both **Statement I** and **Statement II** are true

Ans. (2)

Sol. Angular width, $\theta_w = \frac{\lambda}{d}$

θ_w independent of D but depends on λ

19. The half life of a radioactive substance is 20 minutes.

In how much time, the activity of substance drops to

$\left(\frac{1}{16}\right)^{\text{th}}$ of its initial value ?

- (1) 40 minutes
- (2) 60 minutes
- (3) 80 minutes
- (4) 20 minutes

Ans. (3)

Sol. Half life $T = 20$ min

Left fraction of activity $\frac{1}{16}$

$$\therefore \frac{R}{R_0} = \left(\frac{1}{2}\right)^{t/T}$$

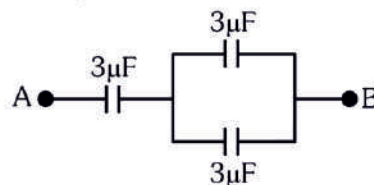
$$\frac{1}{16} = \left(\frac{1}{2}\right)^{t/20}$$

$$\left(\frac{1}{2}\right)^4 = \left(\frac{1}{2}\right)^{t/20}$$

$$4 = \frac{t}{20}$$

$$t = 80 \text{ min}$$

20. The equivalent capacitance of the system shown in the following circuit is :



- (1) $3\mu\text{F}$
- (2) $6\mu\text{F}$
- (3) $9\mu\text{F}$
- (4) $2\mu\text{F}$

Ans. (4)

Sol. $C_{AB} = \frac{3 \times 6}{3 + 6} = 2\mu\text{F}$



21. Resistance of a carbon resistor determined from colour codes is $(22000 \pm 5\%) \Omega$. The colour of third band must be :

- (1) Green
- (2) Orange
- (3) Yellow
- (4) Red

Ans. (2)

Sol. $R = [22 \times 10^3 \pm 5\%] \Omega$

Acc. to color code

Third Band \rightarrow Orange

(color code for digit 3 is orange)

22. An ac source is connected to a capacitor C. Due to decrease in its operating frequency :

- (1) displacement current increases.
- (2) displacement current decreases.
- (3) capacitive reactance remains constant.
- (4) capacitive reactance decreases.

Ans. (2)

Sol. $i_c = i_D = \frac{V_C}{X_C} \sin \omega t$

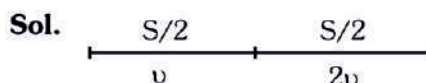
$$i_c = i_D = (V_0 \omega C) \sin \omega t$$

On decreasing frequency $i_c \downarrow$

23. A vehicle travels half the distance with speed v and the remaining distance with speed $2v$. Its average speed is :

- (1) $\frac{2v}{3}$
- (2) $\frac{4v}{3}$
- (3) $\frac{3v}{4}$
- (4) $\frac{v}{3}$

Ans. (2)



$$V_{\text{avg}} = \frac{2v_1 v_2}{v_1 + v_2} = \frac{2(v)(2v)}{v + 2v} = \frac{4v^2}{3v} = \frac{4v}{3}$$

- 24.** The amount of energy required to form a soap bubble of radius 2 cm from a soap solution is nearly: (surface tension of soap solution = 0.03 N m^{-1})
 (1) $5.06 \times 10^{-4} \text{ J}$ (2) $3.01 \times 10^{-4} \text{ J}$
 (3) $50.1 \times 10^{-4} \text{ J}$ (4) $30.16 \times 10^{-4} \text{ J}$

Ans. (2)

Sol. $E = 2T(4\pi R^2)$
 $= 2(0.03)(4)(3.14)(2 \times 10^{-2})^2$
 $= 3.01 \times 10^{-4} \text{ J}$

- 25.** The venturi-meter works on :
 (1) Bernoulli's principle
 (2) The principle of parallel axes
 (3) The principle of perpendicular axes
 (4) Huygen's principle

Ans. (1)

Sol. Venturimeter works on Bernoulli's principle

- 26.** In hydrogen spectrum, the shortest wavelength in the Balmer series is λ . The shortest wavelength in the Bracket series is :
 (1) 4λ (2) 9λ (3) 16λ (4) 2λ

Ans. (1)

Sol. Shortest wavelength in Balmer series when transition of e^- from ∞ to $n = 2$

$$\therefore \frac{1}{\lambda} = RZ^2 \left[\frac{1}{2^2} - \frac{1}{\infty^2} \right]$$

$$\frac{1}{\lambda} = \frac{R}{4} \quad \dots(1)$$

Shortest wavelength is Bracket series when transition of e^- from ∞ to $n = 4$

$$\frac{1}{\lambda'} = R(1)^2 \left[\frac{1}{4^2} - \frac{1}{\infty^2} \right] \Rightarrow \frac{1}{\lambda'} = \frac{R}{16} \quad \dots(2)$$

Eq. (1)/Eq. (2)

$$\frac{\lambda'}{\lambda} = \frac{R}{4} \times \frac{16}{R} \Rightarrow \lambda' = 4\lambda$$

- 27.** The potential energy of a long spring when stretched by 2 cm is U. If the spring is stretched by 8 cm, potential energy stored in it will be :
 (1) 4U (2) 8U (3) 16U (4) 2U

Ans. (3)

Sol. $U = \frac{1}{2}kx^2$

for $x = 2$

$$U = \frac{1}{2}k(2)^2 \quad \dots(1)$$

$$U' = \frac{1}{2}k(8)^2 \quad \dots(2)$$

Eq. (2)/eq. (1)

$$\Rightarrow \frac{U'}{U} = \left(\frac{8}{2} \right)^2$$

$$\Rightarrow U' = 16U$$

- 28.** A full wave rectifier circuit consists of two p-n junction diodes, a centre-tapped transformer, capacitor and a load resistance. Which of these components remove the ac ripple from the rectified output ?

- (1) p-n junction diodes
 (2) Capacitor
 (3) Load resistance
 (4) A centre-tapped transformer

Ans. (2)

Sol. Capacitor used to remove AC ripples from Rectifier output.

- 29.** The magnetic energy stored in an inductor of inductance $4 \mu\text{H}$ carrying a current of 2 A is :
 (1) 4 mJ (2) 8 mJ (3) $8 \mu\text{J}$ (4) $4 \mu\text{J}$

Ans. (3)

Sol. Energy = $\frac{1}{2}Li^2$

$$= \frac{1}{2}4 \times 10^{-6} \times 2^2$$

$$= 8 \times 10^{-6} \text{ J}$$

$$\text{energy} = 8 \mu\text{J}$$

- 30.** If $\oint_S \vec{E} \cdot d\vec{S} = 0$ over a surface, then:

- (1) the magnitude of electric field on the surface is constant.
 (2) all the charges must necessarily be inside the surface.
 (3) the electric field inside the surface is necessarily uniform.
 (4) the number of flux lines entering the surface must be equal to the number of flux lines leaving it.

Ans. (4)

Sol. $\phi_{\text{closed}} = 0$

So $\phi_{\text{in}} = \phi_{\text{out}}$



Number of field lines entering is equal number of field lines leaving.

31. A football player is moving southward and suddenly turns eastward with the same speed to avoid an opponent. The force that acts on the player while turning is :
- (1) along northward
 - (2) along north-east
 - (3) along south-west
 - (4) along eastward

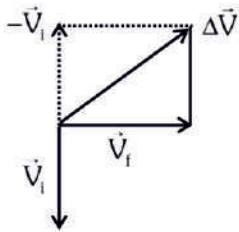
Ans. (2)

Sol. $\vec{V}_i = (V)$ southward

$\vec{V}_F = (V)$ Eastward

$$\Delta\vec{V} = \vec{V}_F - \vec{V}_i$$

= Along North - East



32. Let a wire be suspended from the ceiling (rigid support) and stretched by a weight W attached at its free end. The longitudinal stress at any point of cross-sectional area A of the wire is :
- (1) W/A
 - (2) $W/2A$
 - (3) Zero
 - (4) $2W/A$

Ans. (1)

Sol. Stress = $\frac{IRF}{A}$

$$\text{Stress} = \frac{W}{A}$$

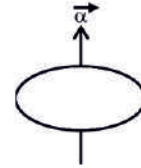
(Here A Cross-sectional Area)



33. The angular acceleration of a body, moving along the circumference of a circle, is :
- (1) along the radius towards the centre
 - (2) along the tangent to its position
 - (3) along the axis of rotation
 - (4) along the radius, away from centre

Ans. (3)

Sol.



Along the axis of rotation

34. In a plane electromagnetic wave travelling in free space, the electric field component oscillates sinusoidally at a frequency of 2.0×10^{10} Hz and amplitude 48 Vm^{-1} . Then the amplitude of oscillating magnetic field is : (Speed of light in free space = $3 \times 10^8 \text{ m s}^{-1}$)
- (1) $1.6 \times 10^{-8} \text{ T}$
 - (2) $1.6 \times 10^{-7} \text{ T}$
 - (3) $1.6 \times 10^{-6} \text{ T}$
 - (4) $1.6 \times 10^{-9} \text{ T}$

Ans. (2)

Sol. $C = \frac{E_0}{B_0}$

$$B_0 = \frac{E_0}{C}$$

$$= \frac{48}{3 \times 10^8}$$

$$= 1.6 \times 10^{-7} \text{ T}$$

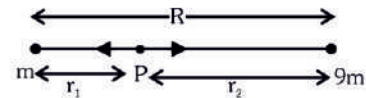
35. Two bodies of mass m and $9m$ are placed at a distance R . The gravitational potential on the line joining the bodies where the gravitational field equals zero, will be (G = gravitational constant) :

- (1) $-\frac{12Gm}{R}$
- (2) $-\frac{16Gm}{R}$

- (3) $-\frac{20Gm}{R}$
- (4) $-\frac{8Gm}{R}$

Ans. (2)

Sol.



Position of Neutral point (Zero Gravitational Field)

$$r_1 = \frac{\sqrt{m_1} R}{\sqrt{m_1} + \sqrt{m_2}} = \frac{\sqrt{m} R}{\sqrt{m} + \sqrt{9m}} = \frac{R}{4}$$

$$r_2 = R - R/4 = 3R/4$$

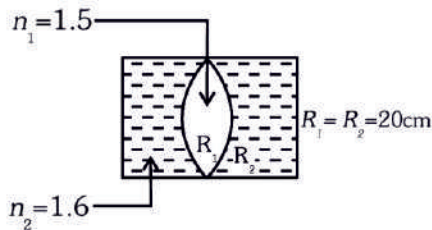
Now Gravitational potential at point P

$$V_p = -\frac{GM}{R/4} - \frac{9(GM)}{3R/4}$$

$$= -\frac{16GM}{R}$$

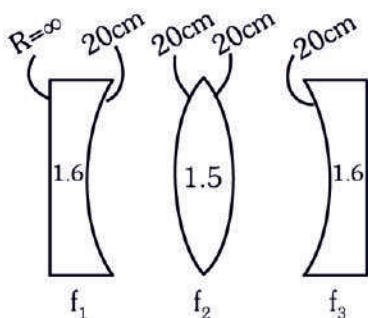
Physics : Section-B (Q. No. 036 to 050)

36. In the figure shown here, what is the equivalent focal length of the combination of lenses (Assume that all layers are thin) ?



- (1) -40 cm (2) -100 cm
(3) -50 cm (4) 40 cm

Ans. (2)



Sol.

Use $\frac{1}{f} = [\mu - 1] \left[\frac{1}{R_1} - \frac{1}{R_2} \right]$

$$\frac{1}{f_1} = [1.6 - 1] \left[\frac{1}{\infty} - \frac{1}{20} \right] = \frac{-3}{100}$$

$$\frac{1}{f_2} = [1.5 - 1] \left[\frac{1}{20} + \frac{1}{20} \right] = \frac{1}{20}$$

$$\frac{1}{f_3} = \frac{-3}{100}$$

$$\frac{1}{f_{eq}} = \frac{1}{f_1} + \frac{1}{f_2} + \frac{1}{f_3}$$

$$\frac{1}{f_{eq}} = -\frac{3}{100} + \frac{1}{20} - \frac{3}{100} = \frac{-1}{100}$$

37. Calculate the maximum acceleration of a moving car so that a body lying on the floor of the car remains stationary. The coefficient of static friction between the body and the floor is 0.15

($g = 10 \text{ m s}^{-2}$).

- (1) 150 m s^{-2}
(2) 1.5 m s^{-2}
(3) 50 m s^{-2}
(4) 1.2 m s^{-2}

Ans. (2)

Sol. $F_s = ma$

$$f_L = ma_{max}$$

$$\mu mg = ma_{max}$$

$$a_{max} = \mu g = 0.15(10) = 1.5 \text{ m/s}^2$$

38. A satellite is orbiting just above the surface of the earth with period T . If d is the density of the earth and G is the universal constant of gravitation, the quantity $\frac{3\pi}{Gd}$ represents :

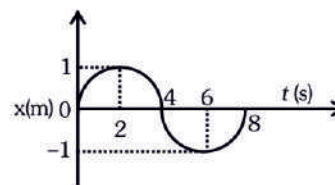
- (1) T^2 (2) T^3 (3) \sqrt{T} (4) T

Ans. (1)

Sol. $T = \frac{2\pi}{\sqrt{GM}} r^{3/2} \Rightarrow T^2 = \frac{4\pi^2 R^3}{G \left(\frac{4}{3} \pi R^3 d \right)} \quad (r = R)$

$$T^2 = \frac{3\pi}{Gd}$$

39. The $x - t$ graph of a particle performing simple harmonic motion is shown in the figure. The acceleration of the particle at $t = 2$ s is :



- (1) $-\frac{\pi^2}{8} \text{ ms}^{-2}$ (2) $\frac{\pi^2}{16} \text{ ms}^{-2}$
(3) $-\frac{\pi^2}{16} \text{ ms}^{-2}$ (4) $\frac{\pi^2}{8} \text{ ms}^{-2}$

Ans. (3)

Sol.

$$x = A \sin(\omega t)$$

$$\frac{dx}{dt} = v = A\omega \cos(\omega t)$$

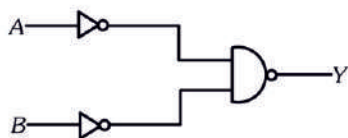
$$\frac{dv}{dt} = a = -\omega^2 A \sin(\omega t)$$

$$a = -\left(\frac{2\pi}{8}\right)^2 \times 1 \sin\left(\frac{2\pi}{8} \times 2\right)$$

$$\Rightarrow a = -\frac{\pi^2}{16} \times \sin\left(\frac{\pi}{2}\right)$$

$$\therefore a = \frac{-\pi^2}{16} \text{ m/s}^2$$

40. For the following logic circuit, the truth table is :



A	B	Y
0	0	0
0	1	1
1	0	1
1	1	1

A	B	Y
0	0	1
0	1	0
1	0	1
1	1	0

A	B	Y
0	0	0
0	1	0
1	0	0
1	1	1

A	B	Y
0	0	1
0	1	1
1	0	1
1	1	0

Ans. (1)

Sol. $y = \overline{\overline{A} \cdot \overline{B}} = \overline{\overline{A} + \overline{B}}$
= (A + B) OR Gate

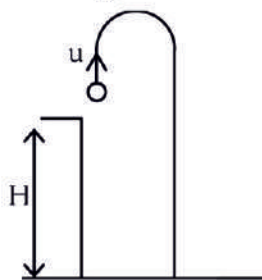
A	B	y
0	0	0
0	1	1
1	0	1
1	1	1

41. A horizontal bridge is built across a river. A student standing on the bridge throws a small ball vertically upwards with a velocity 4 m s^{-1} . The ball strikes the water surface after 4 s. The height of bridge above water surface is (Take $g = 10 \text{ m s}^{-2}$)

- (1) 60 m (2) 64 m
(3) 68 m (4) 56 m

Ans. (2)

Sol. $S = ut + \frac{1}{2}at^2$



$$-H = 4 \times 4 - \frac{1}{2} \times 10 \times 4^2$$

$$-H = 16 - 80$$

$$-H = -64$$

$$H = 64 \text{ m}$$

42. Two thin lenses are of same focal lengths (f), but one is convex and the other one is concave. When they are placed in contact with each other, the equivalent focal length of the combination will be :

- (1) $f/4$ (2) $f/2$
(3) Infinite (4) Zero

Ans. (3)

Sol. $\frac{1}{f_{eq}} = \frac{1}{f_1} + \frac{1}{f_2}$

$$\frac{1}{f_{eq}} = \frac{1}{f} - \frac{1}{f}$$

$$f_{eq} = \infty$$

43. A wire carrying a current I along the positive x-axis has length L . It is kept in a magnetic field $\vec{B} = (2\hat{i} + 3\hat{j} - 4\hat{k})\text{T}$. The magnitude of the magnetic force acting on the wire is :

- (1) $\sqrt{5} IL$ (2) $5 IL$
(3) $\sqrt{3} IL$ (4) $3 IL$

Ans. (2)

Sol. $\vec{F} = I(\vec{\ell} \times \vec{B})$
 $= I[(L\hat{i}) \times (2\hat{i} + 3\hat{j} - 4\hat{k})]$
 $= I(4L\hat{j} + 3L\hat{k})$

$$|\vec{F}| = 5 IL$$

44. A bullet from a gun is fired on a rectangular wooden block with velocity u . When bullet travels 24 cm through the block along its length horizontally, velocity of bullet becomes $\frac{u}{3}$. Then it further

penetrates into the block in the same direction before coming to rest exactly at the other end of the block. The total length of the block is :

- (1) 24 cm (2) 28 cm (3) 30 cm (4) 27 cm

Ans. (4)

Sol. By $v^2 = u^2 + 2as$

$$\left(\frac{u}{3}\right)^2 = u^2 - 2ax$$

$$2ax = u^2 - \frac{u^2}{9}$$

$$\boxed{2ax = \frac{8u^2}{9}} \quad \dots(1)$$

Similarly from starting

$$v^2 = u^2 + 2ax$$

$$0 = u^2 - 2ax_2$$

$$\boxed{2ax_2 = u^2} \quad \dots(2)$$

By (1) / (2)

$$\frac{x}{x_2} = \frac{8}{9}$$

$$\frac{24}{x_2} = \frac{8}{9}$$

$$x_2 = 27 \text{ cm}$$

45. The resistance of platinum wire at 0°C is 2Ω and 6.8Ω at 80°C . The temperature coefficient of resistance of the wire is :

(1) $3 \times 10^{-3}^\circ\text{C}^{-1}$

(2) $3 \times 10^{-2}^\circ\text{C}^{-1}$

(3) $3 \times 10^{-1}^\circ\text{C}^{-1}$

(4) $3 \times 10^{-4}^\circ\text{C}^{-1}$

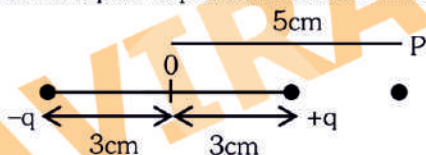
Ans. (2)

Sol. $R_T = R_0[1 + \alpha(T - T_0)]$

$$6.8 = 2[1 + \alpha(80 - \alpha)]$$

$$\alpha = \frac{2.4}{80} = 0.03/^\circ\text{C} = 3 \times 10^{-2}/^\circ\text{C}$$

46. An electric dipole is placed as shown in the figure.



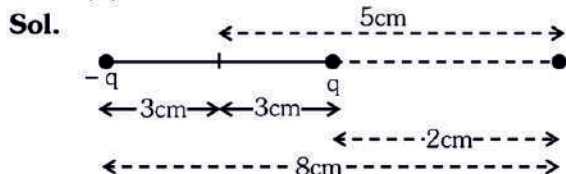
The electric potential (in 10^2 V) at point P due to the dipole is ($\epsilon_0 =$ permittivity of free space and $\frac{1}{4\pi\epsilon_0} = K$):

$$\frac{1}{4\pi\epsilon_0} = K$$

(1) $\left(\frac{5}{8}\right)qK$ (2) $\left(\frac{8}{5}\right)qK$

(3) $\left(\frac{8}{3}\right)qK$ (4) $\left(\frac{3}{8}\right)qK$

Ans. (4)



$$v = \frac{Kq}{2 \times 10^{-2}} - \frac{Kq}{8 \times 10^{-2}}$$

$$= Kq \left[\frac{3}{8} \right] \times 10^2$$

47. 10 resistors, each of resistance R are connected in series to a battery of emf E and negligible internal resistance. Then those are connected in parallel to the same battery, the current is increased n times. The value of n is :

- (1) 100 (2) 1 (3) 1000 (4) 10

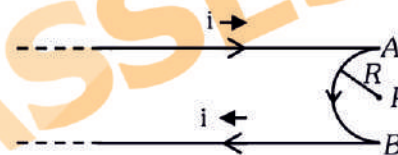
Ans. (1)

Sol. $I_s = \frac{E}{10R}$... (1)

$$I_p = \frac{E}{R/10} = \frac{10E}{R} \quad \dots (2)$$

$$n = \frac{I_p}{I_s} = 100 \Rightarrow n = 100$$

48. A very long conducting wire is bent in a semi-circular shape from A to B as shown in figure. The magnetic field at point P for steady current configuration is given by :



(1) $\frac{\mu_0 i}{4R}$ pointed away from the page

(2) $\frac{\mu_0 i}{4R} \left[1 - \frac{2}{\pi} \right]$ pointed away from page

(3) $\frac{\mu_0 i}{4R} \left[1 - \frac{2}{\pi} \right]$ pointed into the page

(4) $\frac{\mu_0 i}{4R}$ pointed into the page

Ans. (2)

Sol. $B = \frac{\mu_0 I}{4\pi R} (\pi) - \frac{\mu_0 2I}{4\pi R}$

$$= \frac{\mu_0 I}{4R} \left[1 - \frac{2}{\pi} \right] \text{ outward i.e away from page.}$$

49. The radius of inner most orbit of hydrogen atom is $5.3 \times 10^{-11}\text{ m}$. What is the radius of third allowed orbit of hydrogen atom ?

- (1) 1.06 \AA (2) 1.59 \AA
(3) 4.77 \AA (4) 0.53 \AA

Ans. (3)

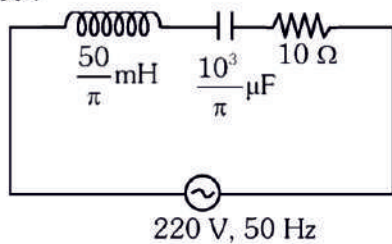
Sol. Radius of n^{th} orbit in Hydrogen Atom

$$r_n = 0.53 \times \frac{n^2}{Z} \text{ \AA}$$

So, radius of third orbit

$$r_3 = 0.53 \times \frac{(3)^2}{(1)} \text{ \AA} = 4.77 \text{ \AA}$$

50. The net impedance of circuit (as shown in figure) will be :



- (1) 15Ω (2) $5\sqrt{5} \Omega$
 (3) 25Ω (4) $10\sqrt{2} \Omega$

Ans. (2)

$$\text{Sol. } X_L = \frac{50}{L} \times 10^{-3} \times 2\pi \times 50 = 5 \Omega$$

$$X_C = \frac{1}{2\pi \times 50 \times \frac{10^3}{\pi} \times 10^{-6}} = 10 \Omega$$

$$Z = \sqrt{R^2 + (X_L - X_C)^2}$$

$$= \sqrt{(10)^2 + (5)^2}$$

$$= 5\sqrt{5} \Omega$$

AVIRAL CLASSES

जहां 25% से ज्यादा बच्चे डॉक्टर बनते हैं...

ALL THE BEST NEET-2023 ASPIRANTS



डॉक्टर ही डॉक्टर

आईये... **अविरल क्लासेस**...

जहां पर एक साधारण विद्यार्थी को असाधारण डॉक्टर बनाने की प्रक्रिया होती है...

छात्र-छात्राओं की पहली पसंद बना 'अविरल'



D.K. Mishra

Founder, Director & HOD-Physics
Alumnus of IIT-Kanpur,
IIM-Lucknow & IIM-Raipur

Guru of
AIR-1 (Two Times), 3, 4, 5, 7, 9 - NEET
AIR-27, 73, 120, 223 - IIT-JEE

- 21 Yrs. of Teaching Experience
- 10 Yrs. with 'Aakash Institute' as an Academic Head & Deputy Director
- Produced many single digit and double digit All India Ranks in NEET & IIT
- Received several Academic Excellence Award in various Forum of Government / News Channel / News Paper / NGO and Private Bodies
- Worked as a Sr. V.P. in Edtech Firm

**Trained 2000+ Doctors
500+ IITians and still Counting**

लगातार 9 वर्षों से सर्वश्रेष्ठ परिणाम

Shireen Ahmad with Mishra Sir
M.A.M.C., Delhi

Kartikya Sharma with Mishra Sir
IMS-BHU, Varanasi

Pragun Ahuja with Mishra Sir
Safdarjung, Delhi

Hritik Chauhan with Mishra Sir
JIPMER, Puducherry

Sanskriti Dutt with Mishra Sir
M.A.M.C., Delhi

Nitish Kumar
GMC, Shimla

Kartikya Sharma 680/720 MBC, Bhoj	Shireen Ahmad 668/720 M.A.M.C., Delhi	Pragun Ahuja 660/720 Safdarjung, Delhi	Semesh S. Dahi 655/720	Hritik Chauhan 650/720 JIPMER, Puducherry	Rajan K. Sharma 649/720	Yashvee Shukla 643/720	Rohit Kandola 642/720	Aditya Singhal 640/720	Arvind Kumar 639/720	Kumar Meenakshi 636/720	Vinod Kumar 635/720	Ananya Sharma 634/720 AFMC, Pune	Sanskriti Dutt 632/720
Ashutosh Kumar 632/720	Kunjia Chaudhary 627/720	Arijan Seervi 626/720	Aishika Gahlot 626/720	Shondara Palidar 625/720	Shobhi Jain 625/720	Rashmi Ali 625/720	Shalja Khandelwal 624/720	Gonind Sharma 623/720	Naman Gupta 621/720	Garvdeep Singh 620/720	Shankar Saini 618/720	Garima Chaudhary 617/720	Garvi Pandey 615/720
Prashil Agrawal 611/720	Saumya Singh 610/720 Sardar Sarbajit, Agra	Nikhil Yadav 610/720	Yashvati Singh 613/720	Shashank Shukla 610/720	Vivek Pratap Singh 608/720	Aditi Chauhan 607/720	Nehal Shandilya 606/720	Muskan Mehrotra 606/720	Srijan Purwal 605/720	Beetika Verma 604/720	Saanchi Merotthiya 602/720	Aleena Nabli 602/720	Naveen S. Rawat 600/720

and many more...

AFMC पुणे मेरिट लिस्ट में 4 छात्र-छात्रायें चयनित

<p>Ananya Sharma</p>	<p>Shailja Kandwal</p>	<p>Saumya Singh</p>	<p>Nihal Joshi</p>
----------------------	------------------------	---------------------	--------------------

ADMISSIONS OPEN : 2023-24

TARGET BATCH

(JEE | NEET)

(XII Passed or Appeared)

बैच प्रारंभ तिथि	
Batch -1 : Already Started	Batch -4 : 7 th June, 2023
Batch -2 : 10 th May, 2023	Batch -5 : 4 th July, 2023
Batch -3 : 23 rd May, 2023	Batch -6 : 25 th July, 2023



- सबसे ज्यादा फ्लारस 1500 से अधिक घंटे की कक्षाएँ।
- 200 फुल टाइम ट्यूटोर्स
- 32 से ज्यादा अनुभवी अध्यापकों का समूह
- पिछले 9 सालों में 8 बार स्टेट टॉपर्स
- निदेशक डी.के.मिश्रा जो स्वयं आईआईटी कानपुर और आईआईएम लखनऊ तथा रायपुर से पढ़े हैं का शिक्षण अनुभव 21 वर्षों से अधिक है। अविरल के निदेशक अकासा इन्स्टीट्यूट में 10 वर्षों से अधिक रूप निदेशक व एकेडमिक हेड रहे हैं।
- निदेशक भौतिक विज्ञान के इंडिया केस के शिक्षक हैं जो कई बार ऑल इंडिया रैंक 1 को पता चूके हैं।
- वेबसाइट में मोबाइल फोन का प्रयोग पूर्णतः वर्जित।
- तपाहले के 6 दिन कक्षाएँ तथा 7^{वें} दिन टेस्ट।
- अन्य संस्थानों से बेहद कम शुल्क।
- लाईव क्लास प्रसारण की सुविधा।
- पूर्णतः वातातुनूकूलित तथा साउंड प्रूफ क्लासरूम।
- सभी कक्षाएँ 8 व 6 एलईडी स्क्रीन पर

Two Year Classroom Program for JEE & NEET (for class XI)	One Year Classroom Program for JEE & NEET (for class XII)
One Year Target Program for JEE & NEET (for class XII Appeared/Passed)	Crash Course (NEET) for Class XII Appeared or Passed
Two Year Foundation Program (for class IX & X)	One Year Foundation Program (for Class X)

AVIRAL CLASSES

IIT-JEE | NEET | FOUNDATIONS

Please follow our Social Media

Web : www.aviral.co.in ,
E-mail : info@aviral.ac.in

Video Solutions of Today's NEET-2023 Test Paper (Live)
@ Mishra Sir & Aviral Classes [YouTube Channel](https://www.youtube.com/channel/UC...) (from 6:30PM onwards)

RAJPUR ROAD : World Trade Tower, 99-Rajpur Road, Dehradun	BALLIWALA : Cubic Plaza, Nr. Balliwala Flyover GMS Road, Dehradun	VIKASNAGAR : M: 79067 69745 M: 76684 17858
Praveen Panwar : 86300 88572 Rajeev Chauhan : 78199 73018 Abhinav Bahuguna : 89790 80318 Rahul Joshi : 79067 69745 Luv Dobhal : 76684 17858		

SUNDAY OPEN